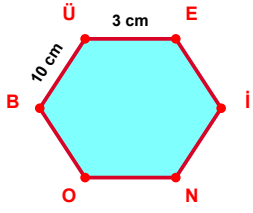
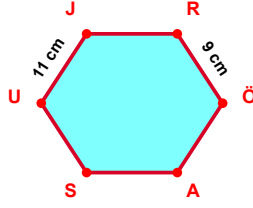


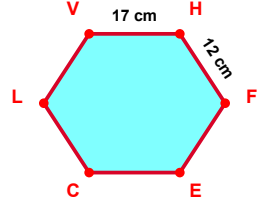
SORU: Aşağıdaki şekillerde verilen, kenar uzunlukları farklarını bulunuz.



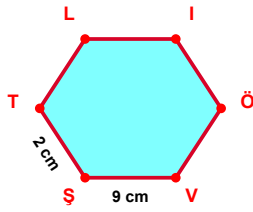
$$|BÜ| - |ÜE| = \dots\dots\dots$$



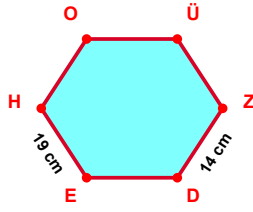
$$|UJ| - |RÖ| = \dots\dots\dots$$



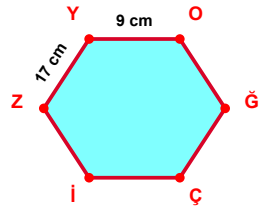
$$|VH| - |HF| = \dots\dots\dots$$



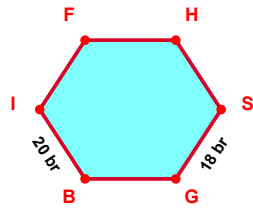
$$|VŞ| - |ŞT| = \dots\dots\dots$$



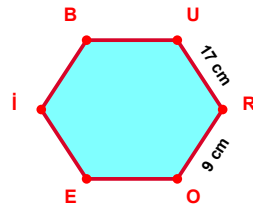
$$|EH| - |ZD| = \dots\dots\dots$$



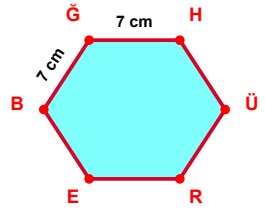
$$|ZY| - |YO| = \dots\dots\dots$$



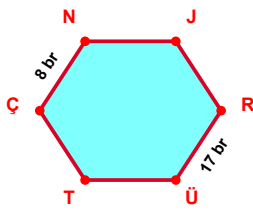
$$|Bİ| - |SG| = \dots\dots\dots$$



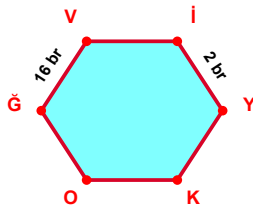
$$|UR| - |RO| = \dots\dots\dots$$



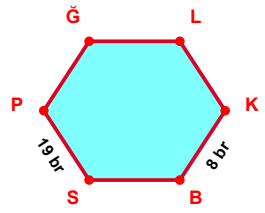
$$|ĞH| - |BĞ| = \dots\dots\dots$$



$$|RÜ| - |ÇN| = \dots\dots\dots$$

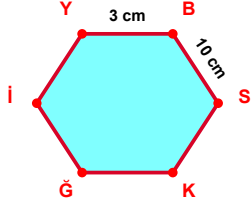


$$|ĞV| - |İY| = \dots\dots\dots$$

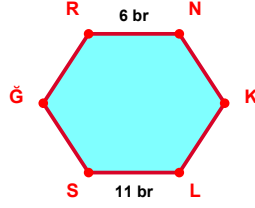


$$|SP| - |KB| = \dots\dots\dots$$

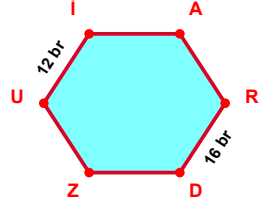
SORU: Aşağıdaki şekillerde verilen, kenar uzunlukları farklarını bulunuz.



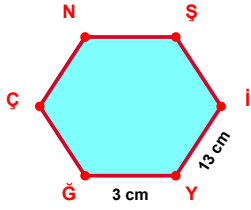
$$|BS| - |YB| = \dots\dots\dots$$



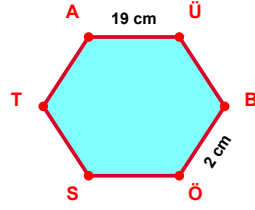
$$|LS| - |RN| = \dots\dots\dots$$



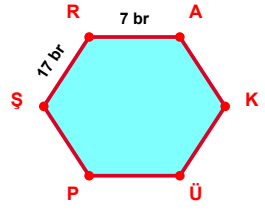
$$|RD| - |UI| = \dots\dots\dots$$



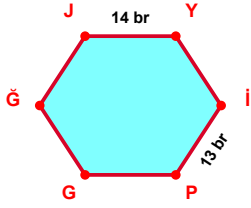
$$|İY| - |YĞ| = \dots\dots\dots$$



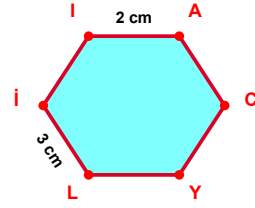
$$|AÜ| - |BÖ| = \dots\dots\dots$$



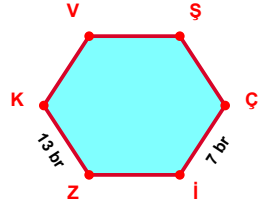
$$|ŞR| - |RA| = \dots\dots\dots$$



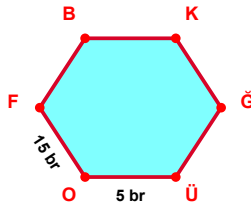
$$|JY| - |İP| = \dots\dots\dots$$



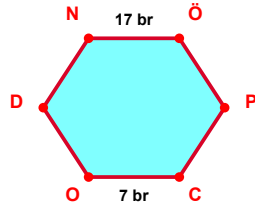
$$|LI| - |IA| = \dots\dots\dots$$



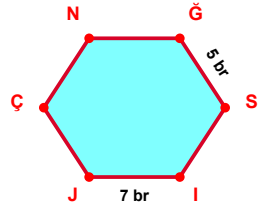
$$|ZK| - |Çİ| = \dots\dots\dots$$



$$|OF| - |ÜO| = \dots\dots\dots$$



$$|NÖ| - |CO| = \dots\dots\dots$$



$$|IJ| - |ĞS| = \dots\dots\dots$$

## SÜREÇ ODAKLI DEĞERLENDİRME ÖLÇEĞİ

Doğru Sayısı: ..... / 24

Öğretmen ilgili kutucuğu işaretler.

Geliştirilmeli (0-8)

İyi (9-14)

Çok İyi (15-20)

Mükemmel (21-24)



Hazırlayan: .....

Bu bölüme sınıfınızın ilgili kazanıma yönelik genel durumuna ilişkin gözlem ve izlenimlerinizi, öğrencilerinizin bu kazanımla ilgili öğrenme eksikliklerini ve bu eksikliklerin giderilmesi amacıyla yaptığınız/yapmayı planladığınız faaliyetleri not edebilirsiniz.

No	Adı - Soyadı	Toplam Puan	Değerlendirme
1			
2			
3			
4			
5			
6			
7			
8			
9			
10			
11			
12			
13			
14			
15			
16			
17			
18			
19			
20			
21			
22			
23			
24			
25			
26			
27			
28			
29			
30			
31			
32			
33			
34			
35			

Hazırlayan: ..... ..